



Department of Computer Science
Faculty of Computing
UNIVERSITI TEKNOLOGI MALAYSIA

SUBJECT : SCSR1013 DIGITAL LOGIC

SESSION/SEM :

.....02/01.....

LAB 3 : SYNCHRONOUS DIGITAL COUNTER

NAME 1 : Aman Sufian Shah Bin Shamsuddin

NAME 2 : Kalairtharan A/L Palanyvelu

DATE : 3 January 2025

REMARKS :

MARKS:

Lab #3

Identifying The Properties of a Synchronous Counter

A. Aims

- 1) Expose the student with experience on constructing synchronous counter circuit using Flip-Flop IC, Basic Gate ICs, Breadboard and ETS-5000 Digital Kit.
- 2) Promote critical thinking among students by analyzing the given circuit and identifying the behavior of the digital circuit.

B. Objectives

The objectives of this lab activity are to:

- 1) Implement a synchronous counter circuit into physical circuit using Breadboard, Flip-Flops, Basic Gates and Switches.
- 2) Completing the next-state table of the counter circuit.
- 3) Sketch the state diagram of the counter circuit.
- 4) Identify the properties of the counter.

C. Materials And Equipments

Materials and equipment required for this lab are as follows:

Item Name	Number of Item
1. Breadboard	1
2. 7408 Quad 2-Input AND	1
3. 7404 Hex Inverter	1
4. 7432 Quad 2-input OR	1
5. 7476 Dual J-K Flip Flop	1
6. ETS-5000 Digital Kit	1

D. Introduction

Flip-Flops

A flip-flop is the simplest type of memory cell. Its output, Q, does not depend solely upon its inputs, but also depends on the order in which they are applied. Thus, the flip-flop is not a combinational circuit, but is a sequential circuit. The flip-flop is the key building block of most synchronous sequential circuits. There are four common types of flip-flops. The symbol and truth table for each is shown in Figure 1.

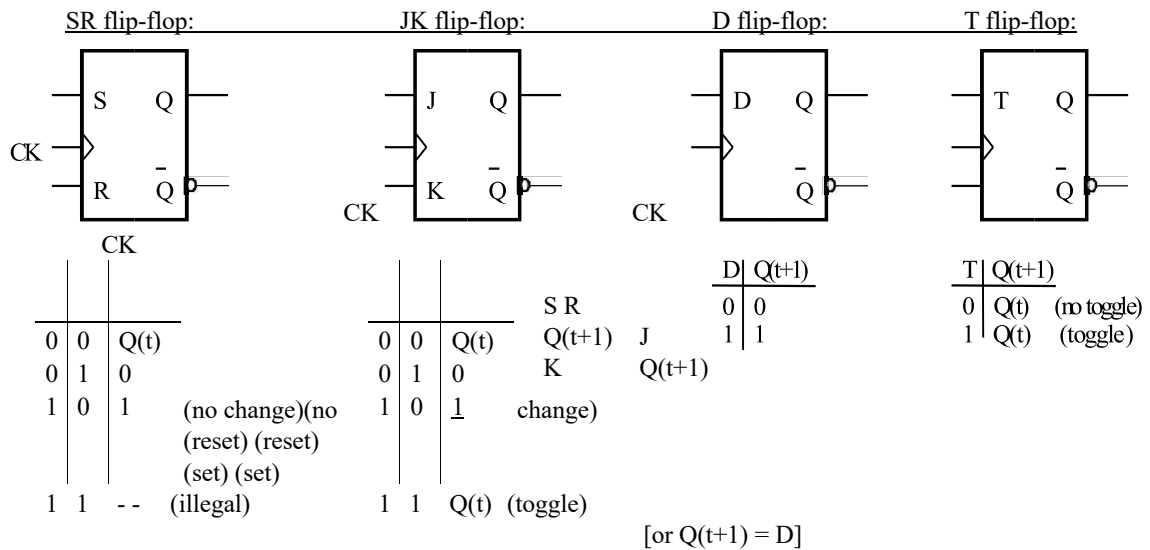


Figure 1: Four common types of flip-flops

Flip-flops are synchronous devices meaning that the output responds to the synchronous inputs (S, R, J, K, D or T) only on certain clock edges. There are three main types of triggering:

- 1) positive-edge triggering - the output Q can only change on the positive (rising) edge of the clock (due to the values of the synchronous inputs).
- 2) negative-edge triggering - the output Q can only change on the negative (falling) edge of the clock (due to the values of the synchronous inputs).
- 3) master-slave triggering - the synchronous inputs are “read” on the positive edge of the clock, but the output Q does not respond until the negative edge of the clock.

The type of triggering is sometimes indicated by the symbol. Shown below in Figure 2 are JK flip-flops with all three types of triggering.

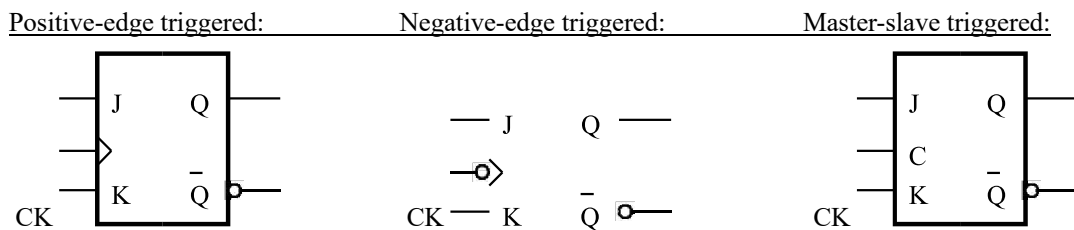


Figure 2: JK Flip-flops with different types of triggering

Flip-flops often have asynchronous inputs available also. These inputs are not synchronized with the clock, therefore, the output may respond immediately to changes in these inputs. There are two types of asynchronous inputs commonly used:

- 1) PRESET (also called SET) - used to preset the output Q to 1
- 2) CLEAR (also called RESET) - used to clear the output (set Q to 0)

Asynchronous inputs are often active-LOW. Therefore, they are typically tied HIGH for normal flip-flop operation. The PRESET or CLEAR may be momentarily set LOW to initialize the flip-flop to some desired initial value. The symbol for a flip-flop often shows the asynchronous inputs as indicated below in Figure 3.

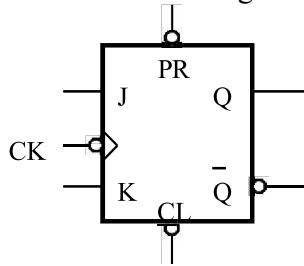


Figure 3: JK Flip-flops with asynchronous PRESET and CLEAR inputs

E. Preliminary Works

- 1) Using 7476 IC, connect the synchronous input (J, K) of a JK flip-flop to switches and its output (Q) to an LED. Connect the CLK input to a pulser

switch, A. Determine the logic level for each input combinations in Table 1 so that the desired result can be realized.

Table 1

Desired Result	PRE	CLR	J	K	CLK	Q
Set initial value Q = 1	0	1	X	X	--	1
Output Q stays the same	1	1	0	0	↓	1
Output Q become 0, no change in asynchronous input	1	1	0	1	↓	0
Output Q is not the previous Q	1	1	1	1	↓	1
RESET Q	1	1	0	1	↓	0
SET Q	1	1	1	0	↓	1

2) Answer all questions.

a) Which state that JK flip-flop has, but not on SR flip-flop.

= Toggle state

b) Identify whether the JK flip flop in 7476, is a positive-edge triggered or negative-edge triggered flip flop.

= Negative – edge triggered

F. Lab Activities

1) You are given a counter circuit as shown in Figure 4.

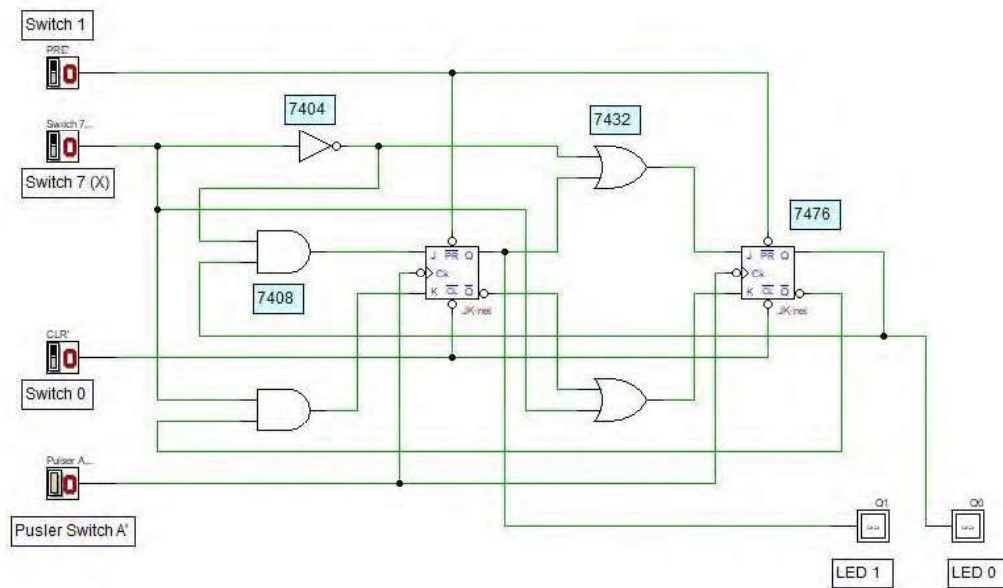


Figure 4: A Synchronous Counter Circuit

- 2) By using all materials and equipment's listed in section C, construct the physical circuit of Figure 4. (Make sure all ICs are connected to Vcc and GND).
- 3) Investigate the behavior of the counter by observing the next state of the counter for all combination of Present State and X values. Complete the Next- State table of the counter in Table 2. Ensure the Switch 0 is in HIGH state.
(0=LOW, 1=HIGH)

Table 2

Switch 7	Present State		Next State	
X	Q1 LED 1	Q0 LED 0	Q1 LED 1	Q0 LED 0
0	0	0	0	1
0	0	1	1	0
0	1	0	1	1
0	1	1	1	1
1	0	0	0	0
1	0	1	0	0
1	1	0	0	1
1	1	1	1	0



Fully
Completed

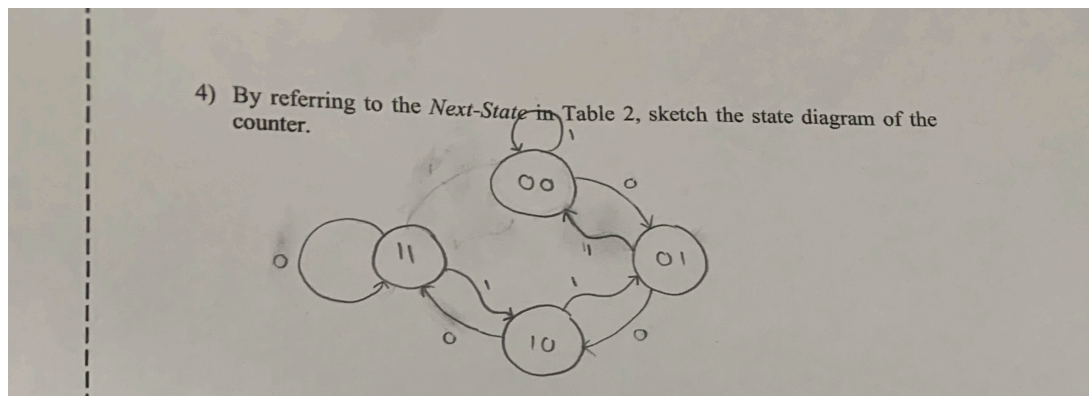
☐

Partially
Completed

☐

Checked by: _____

- 4) By referring to the Next-State in Table 2, sketch the state diagram of the counter.
Answer :



- 5) By referring to the Next-State in Table 2 and the state diagram in (4), answer all questions.

a) What is the main indicator to decide that the counter is a synchronous counter?

Answer : Every flip flop use clock inputs to synchronize the circuit operation Rather than based on signal passed from one stage to another.

b) How many states are available for the counter and what are they?

Answer : 4

00 (no change)

01 (reset)

10 (set)

11 (toggle)

c) What is the function of Switch 7 (X) in the circuit?

Answer : clock input to synchronize the circuit operation, change the counter mode which switch 0 to count up and switch 1 is to count down

d) What is the function of Switch 0 and Switch 1 in the circuit?

Answer : switch 0 is CLR' to reset output to 0

Switch 1 is PRE' to set initial value to 1

e) Is the counter a saturated counter or recycle counter?

Answer : Saturated counter

Fully
Completed ☐

Partially
Completed ☐

Checked by: _____



